

ASSESSMENT - 2

NAME: _____

SUBJECT: _____

GRADE: UKG

DATE: _____

TIME: 3 Hours

MARKS OBTAINED

TOTAL MARKS: 50

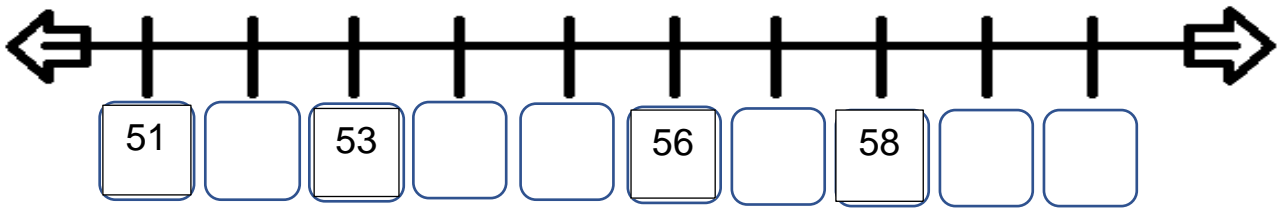
I. COUNT AND WRITE THE NUMBERS:

(5x1=5)

a		
b		
c		
d		
e		

II.COMplete the number line:

(6x1/2 =3)



III.WRITE BEFORE,AFTER AND BETWEEN NUMBERS:

(5x1=5)

a. _____ 54

b. 51 _____ 53

c. 55 _____

d. _____ 69

e. 66 _____ 68

IV.COMplete the pattern :

(4x1/2=2)

a. ○ □ ○ □ _____ ○

b. # # \$ \$ # _____ \$ _____

V.WRITE THE NUMBER NAMES:

(4x2=8)

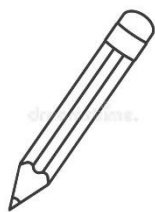
14	
11	
13	
15	

VI.COLOUR THE THICK OBJECT IN ORANGE COLOUR: (1x2=2)




VII.DRAW A LONG PENCIL:

(1x2=2)



VIII.COLOUR THE GATE IN A PATTERN OF YOUR CHOICE: (1x3=3)



XI.ORAL :

(20)

1.RECITING NUMBERS (/10)

2.IDENTIFYING SHAPES (/ 5)

3.COUNTING BY 10'S -USING BEADS (/ 5)

~~~~~ ALL THE BEST ~~~~~